




Oxford Cambridge and RSA

Tuesday 7 June 2022 – Afternoon

**GCSE (9–1) Geography B
(Geography for Enquiring Minds)**

J384/02 People and Society

Time allowed: 1 hour



You must have:

- the Resource Booklet (inside this document)

You can use:

- a ruler (cm/mm)
- a scientific or graphical calculator



Please write clearly in black ink. **Do not write in the barcodes.**

Centre number

--	--	--	--	--

Candidate number

--	--	--	--

First name(s)

Last name

INSTRUCTIONS

- Use black ink. You can use an HB pencil, but only for graphs and diagrams.
- Write your answer to each question in the space provided. If you need extra space use the lined pages at the end of this booklet. The question numbers must be clearly shown.
- Answer **all** the questions.

INFORMATION

- The total mark for this paper is **50**.
- The marks for each question are shown in brackets [].
- Quality of extended response will be assessed in questions marked with an asterisk (*).
- Spelling, punctuation and grammar (SPaG) and the use of specialist terminology will be assessed in questions marked with a pencil (✎).
- This document has **12** pages.

ADVICE

- Read each question carefully before you start your answer.

2
SECTION A

Answer **all** the questions.

Urban Futures

1 (a) Which **one** of the following most accurately defines re-urbanisation?

- A When people migrate back into inner city areas
- B When people migrate from the inner city to the countryside
- C When people move from one city to another
- D When people move from the inner city to the suburbs

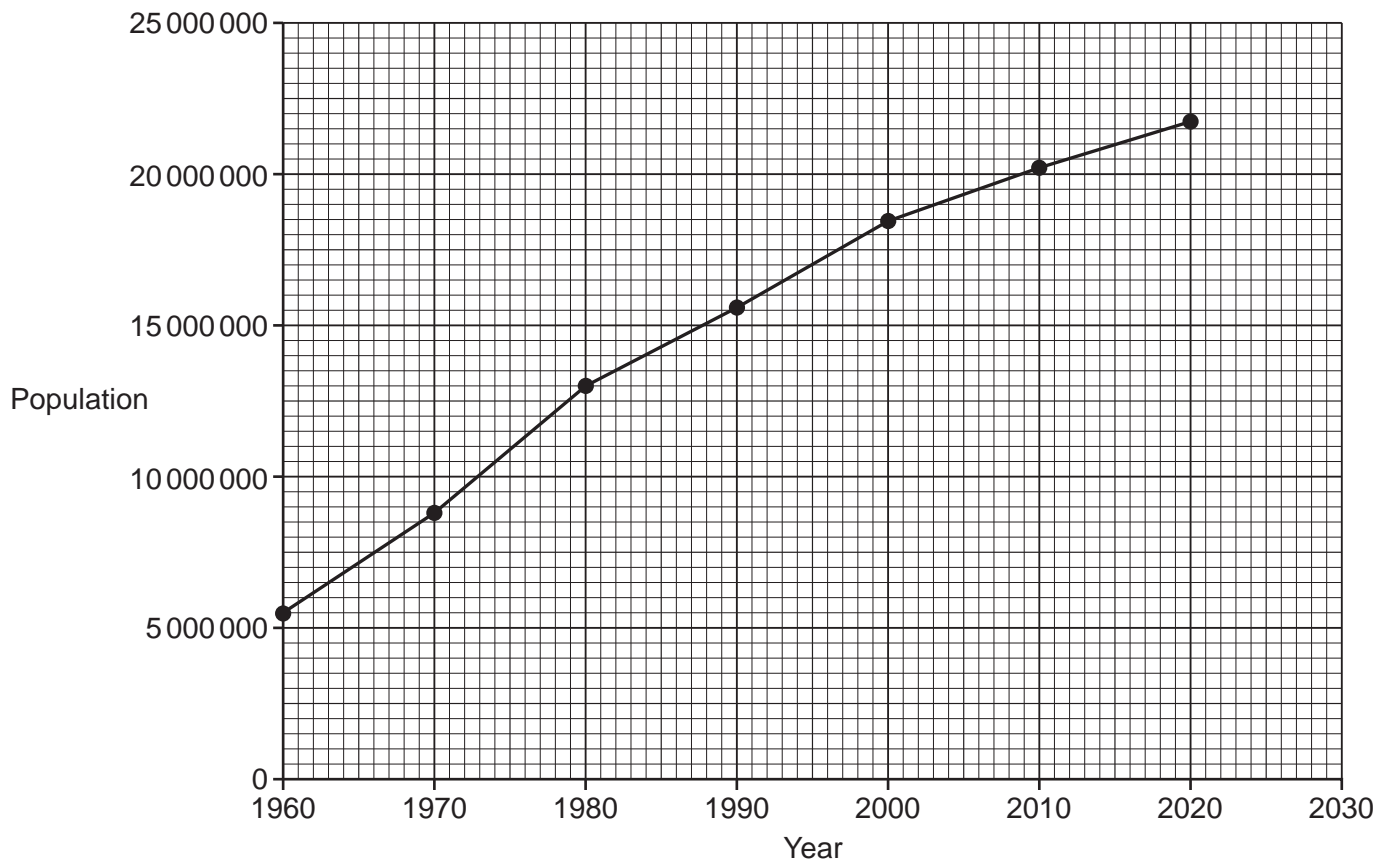
Write the correct letter in the box. [1]

(b) Give **one** reason why people would be attracted to live in the suburbs of a city.
.....
..... [1]

(c) Explain the consequences of suburbanisation.
.....
.....
.....
.....
.....
..... [3]

3

(d) Study the graph below, which shows the population growth in a city in an EDC.



(i) The population of the city is expected to reach 24 000 000 by 2030. Plot this on the graph. [1]

(ii) Calculate the increase in population between 1980 and 1990.

..... [1]

5
BLANK PAGE

PLEASE DO NOT WRITE ON THIS PAGE

Turn over for the next question

Dynamic Development

2 (a) Which **one** of the following is the correct description of bottom-up development?

- A When local communities have their views ignored
- B When non-governmental organisations (NGOs) work in cooperation with local communities to find out about their needs
- C When the government make decisions about what is best for people in the country
- D When the World Bank gives money to the government to help them to develop

Write the correct letter in the box.

[1]

(b) Explain **one** way that debt relief may help an LIDC to develop.

.....

.....

.....

..... [2]

(c) Study **Fig. 1** in the separate Resource Booklet, which shows the share of population with access to improved drinking water.

(i) Which **one** of the following statements is correct?

- A Africa is the continent with the lowest share of the population with access to improved drinking water
- B All countries in Europe have 85% share of the population with access to improved drinking water
- C South America is the continent with the lowest share of the population with access to improved drinking water
- D There is no variation in access to improved water in Asia

Write the correct letter in the box.

[1]

(ii) Suggest an alternative way of effectively displaying the data shown in **Fig. 1**.

.....

..... [1]

UK in the 21st Century

3 (a) State **two** causes of an ageing population.

1

2

[2]

(b) Study **Fig. 2** in the separate Resource Booklet, which shows a graph showing immigration to the UK.

(i) Which **one** of the following statements most accurately describes the trend shown by the graph?

A Immigration has decreased overall, but there have been some fluctuations

B Immigration has increased at a steady speed

C Immigration has increased overall, but there have been some fluctuations

D Immigration has increased year on year

Write the correct letter in the box.

[1]

(ii) Suggest **one** reason for the decrease in migration to the UK in 2013.

..... [1]

(iii) Which year had the highest level of migration to the UK?

..... [1]

SECTION B


Answer the question.

Human Geography Fieldwork

- 4* Study **Figs. 3, 4 and 5** in the separate Resource Booklet, which show information about the London congestion charge and air pollution in London in 2003 and 2016.

Using evidence from **Figs. 3, 4 and 5**, write a conclusion to the hypothesis: 'Air pollution levels in London have decreased as a result of the congestion charge.' Develop your answer.

..... [8]

 Spelling, punctuation and grammar and the use of specialist terminology [3]

END OF QUESTION PAPER

ADDITIONAL ANSWER SPACE

If additional space is required, you should use the following lined page(s). The question number(s) must be clearly shown in the margin(s).

A large area of horizontal dotted lines for writing, with a solid vertical line on the left side. The lines are evenly spaced and extend across the width of the page, providing a template for handwritten answers.

A large area of the page is reserved for writing, featuring a vertical solid line on the left side and horizontal dotted lines extending across the page.



Copyright Information

OCR is committed to seeking permission to reproduce all third-party content that it uses in its assessment materials. OCR has attempted to identify and contact all copyright holders whose work is used in this paper. To avoid the issue of disclosure of answer-related information to candidates, all copyright acknowledgements are reproduced in the OCR Copyright Acknowledgements Booklet. This is produced for each series of examinations and is freely available to download from our public website (www.ocr.org.uk) after the live examination series.

If OCR has unwittingly failed to correctly acknowledge or clear any third-party content in this assessment material, OCR will be happy to correct its mistake at the earliest possible opportunity.

For queries or further information please contact The OCR Copyright Team, The Triangle Building, Shaftesbury Road, Cambridge CB2 8EA.

OCR is part of Cambridge University Press & Assessment, which is itself a department of the University of Cambridge.